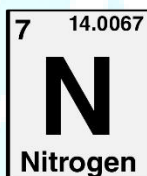
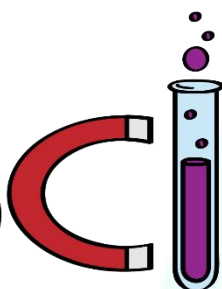
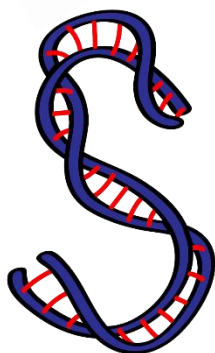




ASPIRE
INTERNATIONAL SCHOOL



Science Department

2023/2024

Year 2

Term 3, Week 5

ASPIRE

INTERNATIONAL SCHOOL

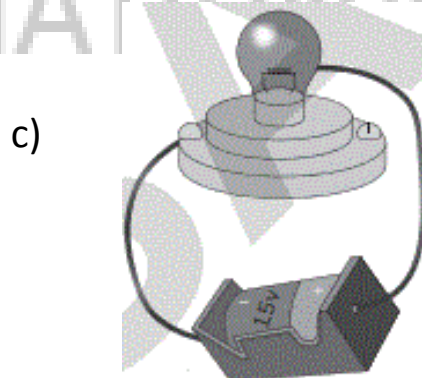
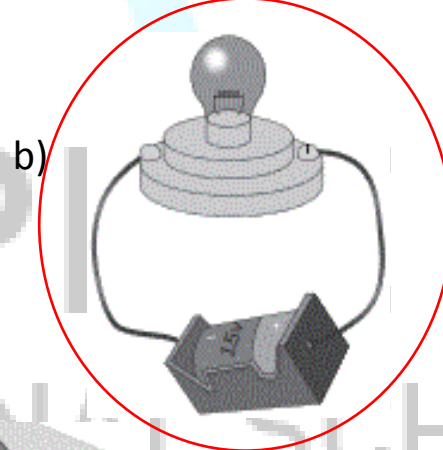

Name:

Class:

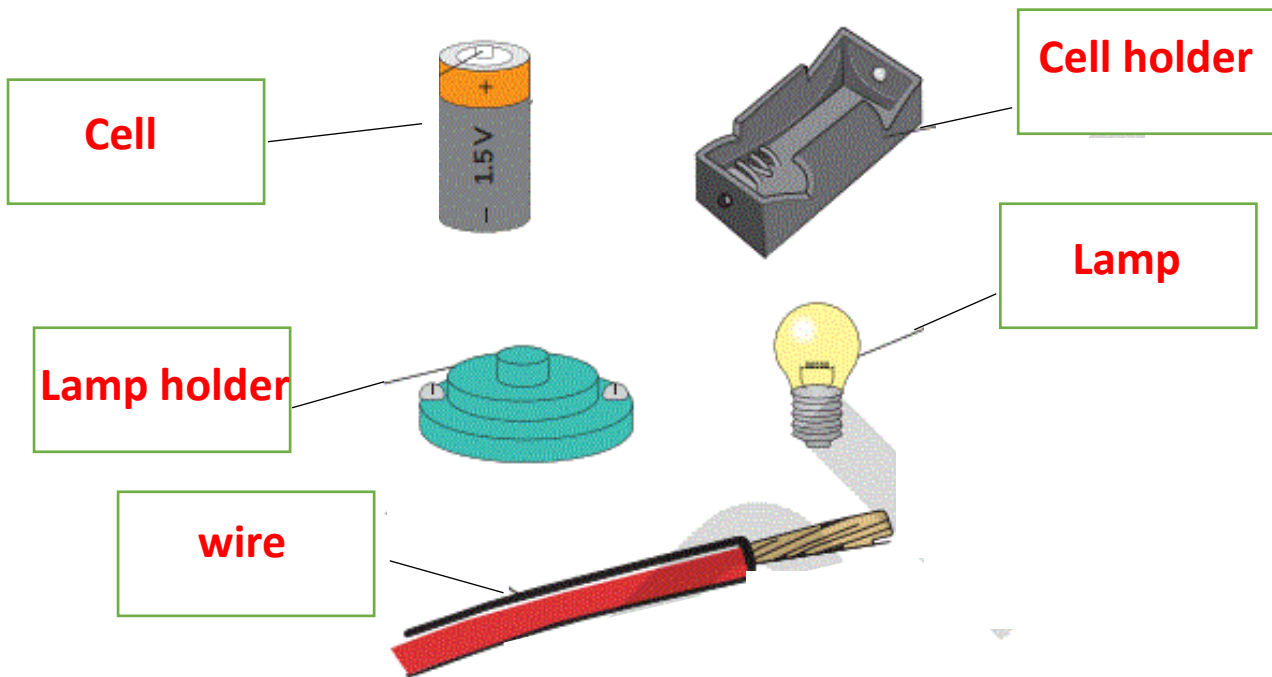
Choose the correct answer:

1. A circuit is a path for the ----- to move along and make things work.
(**electricity** - water)
2. The ----- shines when it is in a complete circuit. (cell – **lamp**)
3. Electricity moves through ----- . (**wires** - wood)
4. In a circuit, each cell has ----- connections and both are used. (four- **two**)
5. The ----- holds the cell and connects it to the wires. (**cell holder**- lamp holder)
6. A cell is often called a ----- . (wire- **battery**)
7. Electricity moves through the ----- part of a wire. (**metal**- plastic)
8. The lamp holder holds the ----- and connects it to the wires. (cell- **lamp**)
9. ----- is a conductor of electricity. (Plastic- **Metal**)

Draw a circle around the circuits that will work:



Label the parts that are used to make a circuit:



ASPIRE
INTERNATIONAL SCHOOL