
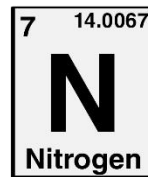

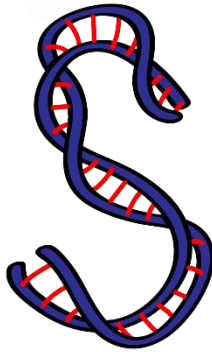




ASPIRE
INTERNATIONAL SCHOOL



Science Department

2023/2024

Year 4

Term 2, Week 6

Model answer of worksheet

Revision pack

Name:

Class:

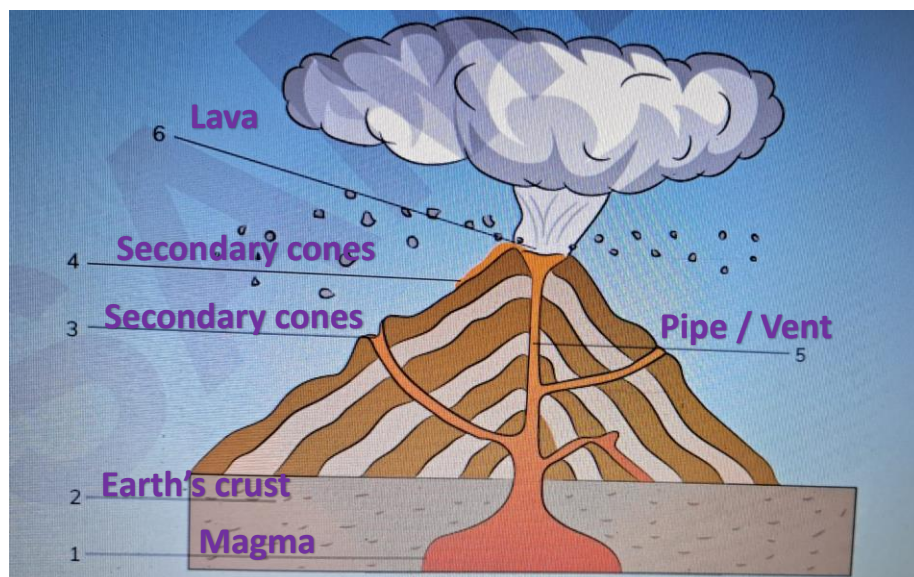
1- Complete the table

Bird	Shape of beak	How does the bird's beak help it to catch and eat food?
Pigeon	Small and pointed	It ... crack opens seeds.
Kingfisher	Large with a sharp..... point	It catches fish
Starling Long and pointed.	It uses the point to dig For worms.
Flamingo	Long and flat	

2- Match

Word	Meaning
1) Crust	The outer layer of the earth.
2) Crater	A large hole at the top Of a volcano where material erupts.
3) Internal structure	Materials that make up the inside of the earth.
4) Earthquake	A shaking of the earth.
5) Habitat	A place where a plant or animal lives.
6) Core	The centre of the earth.
7) Tsunami	A huge sea wave that caused by an earthquake that starts under the sea.
8) Mantle	The layer of the earth below the crust.

3- Look at the diagram



4- Answer the following

a- Which layer is solid and made of metal?

-----**Inner core**----- .

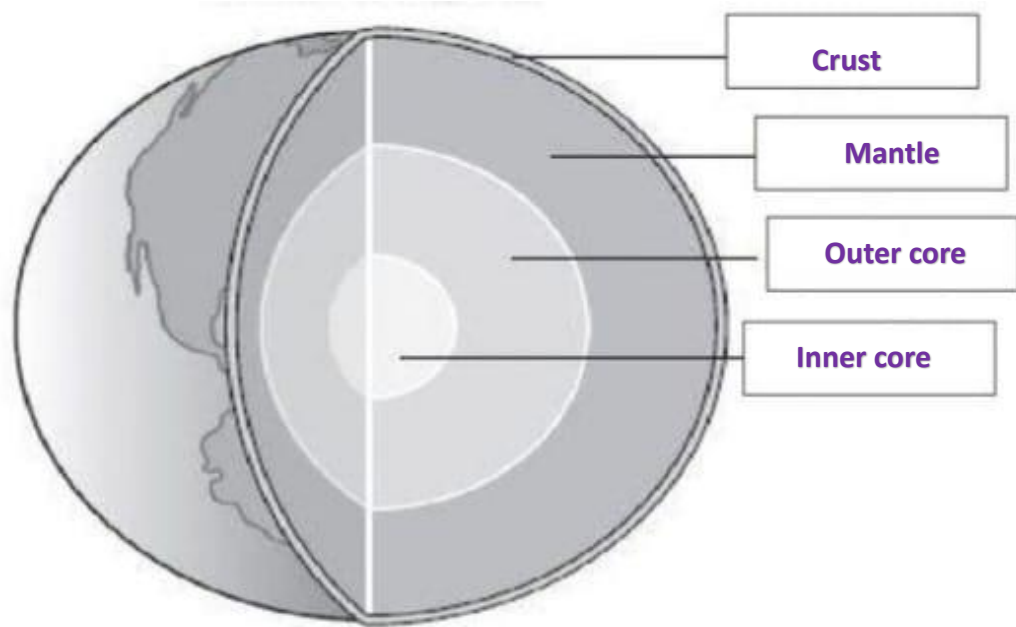
b- Which layer is liquid rock?

-----**Mantle**----- .

c- What's a tsunami?

-----**When an earthquake begins under the sea, a huge wave develops**----- .

5- Label the following diagram



6- Complete

a- The earth is shaped like a**ball**..... .

b- The thickest layer of the earth is**core**..... .

c- Molten rock is called**magma**..... .

d- The largest tube through which magma travels to the surface is called**central pipe / vent**..... .

e- Volcanoes are usually located where tectonic**plates**..... meets.

f- Fish uses their**gills**..... to breathe and**fins**..... to move.

g-**Focus**..... point is where the earthquake begins inside the crust.