
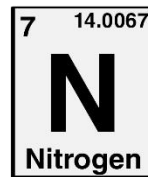
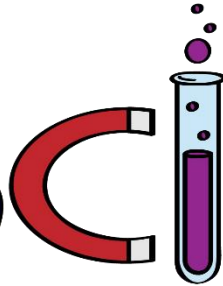
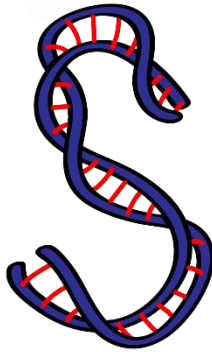




**ASPIRE**  
INTERNATIONAL SCHOOL



**Science Department**

**2023/2024**

**Year 4**

**Term 2, Week 6**

**Revision pack**

**Mid-term**

**Name:** .....

**Class:** .....

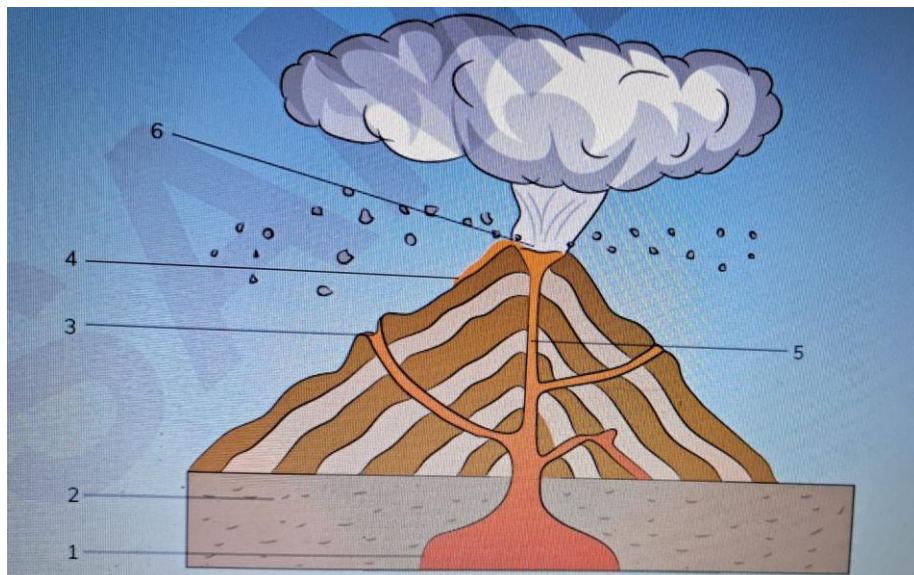
1- Complete the table

Bird	Shape of beak	How does the bird's beak help it to catch and eat food?
Pigeon	Small and pointed	It ..... opens seeds.
Kingfisher	Large with a sharp..... .	It catches .....
Starling	..... and pointed.	It uses the point to ..... For worms.
Flamingo	Long and .....	

2- Write the meaning for each of the following:

Word	Meaning
1) Crust	A)
2) Crater	B)
3) Internal structure	C)
4) Earthquake	D)
5) Habitat	E)
6) Core	F)
7) Tsunami	G)
8) Mantle	H)

3- Label the following diagram:



4- Answer the following

a- Which layer is solid and made of metal?

.....

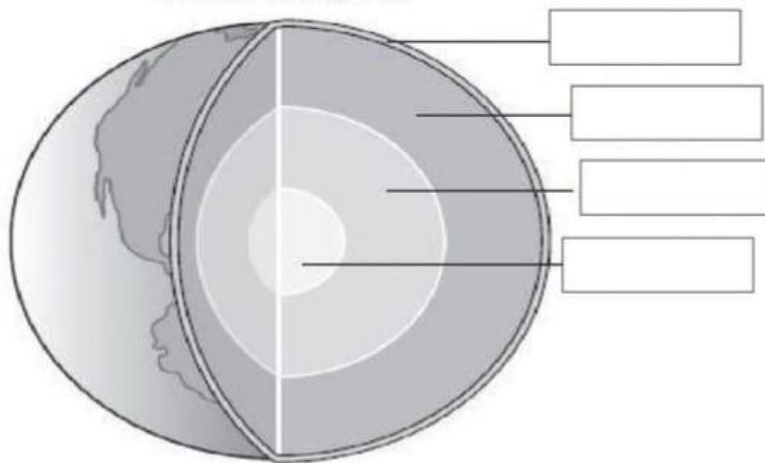
b- Which layer is liquid rock?

.....

c- What's a tsunami?

.....

5- Label the following diagram



6- Complete the following statements:

a- The earth is shaped like a .....

b- The thickest layer of the earth is .....

c- Molten rock is called .....

d- The largest tube through which magma travels to the surface is called .....

e- Volcanoes are usually located where tectonic ..... meets.

f- Fish uses their ..... to breathe and ..... to move.

g- ..... point is where the earthquake begins inside the crust.