

# Maths Year 2

## Word Problems Revision Pack

**Name:** \_\_\_\_\_

**Class:** \_\_\_\_\_

# Multiplication Word problems

Solve the following word problems, write the number sentence:

## Multiples of 2

Mr Patch's class are writing a story. There are 25 children in the class. Each child writes 2 pages of their story. How many pages does the class write in total?



## Multiples of 5

A badger has 5 toes on each of its feet. How many toes do 2 badgers have altogether?



## Multiples of 5

Anita is having a birthday party. Party hats come in packets of 5. She has 15 friends coming to her party. How many packets of hats does she need?



## Multiples of 10

There are 10 sweets in a packet. Kelly buys 2 packets and Henry buys 3. How many sweets do they have altogether?



## Multiples of 2

Around our park, there are 12 birds' nests. Each nest contains 2 birds. How many birds live in the park?



## Multiples of 5

There are 5 cookies in a jar. I have 3 jars in the kitchen. How many cookies do I have?



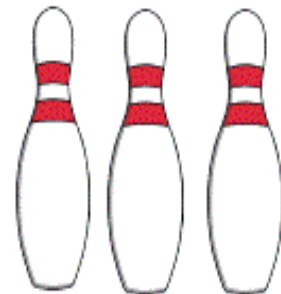
## Multiples of 2

A football team needs to buy new boots for its players. There are 11 players on the team. How many boots need to be bought altogether?



## Multiples of 10

I go bowling and knock down all 10 pins. I do this 5 times in a row. How many pins do I knock down in total?



## Multiples of 2

In Miss Carol's class, the children are using laptops. The children are working together, in pairs. There are 10 laptops in the room. How many children are in Miss Carol's class?




## Multiples of 10

On a school trip, the children get separated into groups of 10. There are 7 groups. How many children are on the trip?



## Multiples of 2

The fruit shop sells apples in pairs. Rachel buys 4 pairs of apples and David buys 2 pairs. How many apples do they buy altogether?




## Division Word problems

Solve the following division word problems, write the number sentence:


**Hot Chocolate** ★★★

**Mrs Busfield is making hot chocolate for herself and 4 children. She has 28 marshmallows. Does she have enough to give them 6 each?**



**Catching Fish** ★★★


**One group catches 20 fish. They want to put 5 in each jar so they can see them clearly. Is Riley correct? Prove it!**



3 jars will be enough.

**Rope Swing** ★★★


**Fred and Pasha take equal turns on the rope swing. They swing for 24 minutes. How long do they get each?**



**Conkers** ★★★


**5 friends collect 55 conkers. They share them fairly. How many do they get each?**

**If 2 different friends collected 18 conkers, would they get more or less each than the 5 friends?**




**Pond Snails** ★★

**One group catches 40 pond snails. They divide them between 5 microscopes.**  
How many pond snails should they put under each microscope?




**Shelters** ★★

**The children collect 50 branches to make shelters. They share them between the 5 groups.**  
How many branches does each group have?




**Picnic** ★★

**Mrs Busfield is setting out the picnic. She has brought 50 sandwiches and 10 plates.**  
How many sandwiches should she put on each plate?



**Toasted Marshmallows** ★★

**It takes 2 minutes to toast a marshmallow.**  
How many marshmallows can be toasted in 22 minutes?



Blackberry Pies



**One group collects 20 blackberries to bake into pies.**

If they bake 2 pies, how many blackberries can they put into each pie?



Newts



**While pond dipping, the children catch 30 newts to study.**

If they put 5 in each bucket, how many buckets will they need?



Hot Chocolate



**There are 14 marshmallows left for 2 children to put on their hot chocolates.**

How many can they have each?



Nature Pictures



**Finn and Dan collect objects to make a picture.** They have 50 objects and want to use 10 for each picture. How many pictures can they make?



# Addition and Subtraction Two-Step Word Problems

Learning Intention:

I can solve two-step problems involving addition and subtraction.

1. John buys 12 pencils one week and 7 the following week. He gives 3 pencils to his friend.



How many pencils does he have left?

2. Lydia has 15 marbles. She takes them to her friend's house. She loses 3 on the way and 4 in the house.



How many does she have left?

3. Asif has a packet of biscuits. There are 12 in the packet. He gives 6 of the biscuits to some friends. He buys another packet of 12 biscuits.



How many biscuits does he have now?

4. Amina collects 23 leaves. She gives 6 of the leaves to her brother and 8 to her sister.



How many leaves does she have left?