

Name: \_\_\_\_\_

Total: [20]

Class: \_\_\_\_\_

Question 1

[10]

Compare the following animals in terms of height and answer the questions!

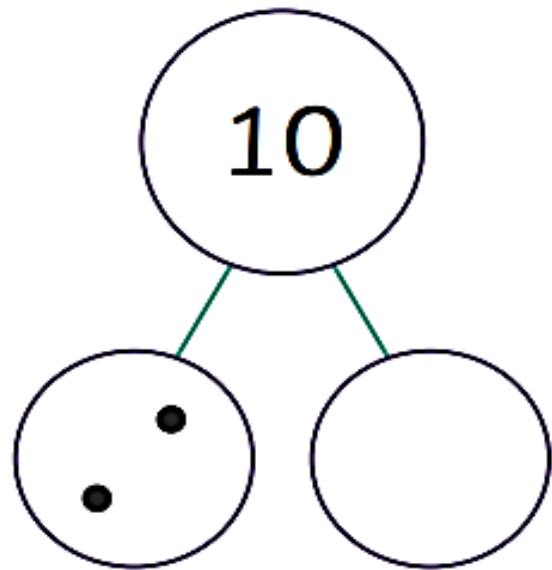
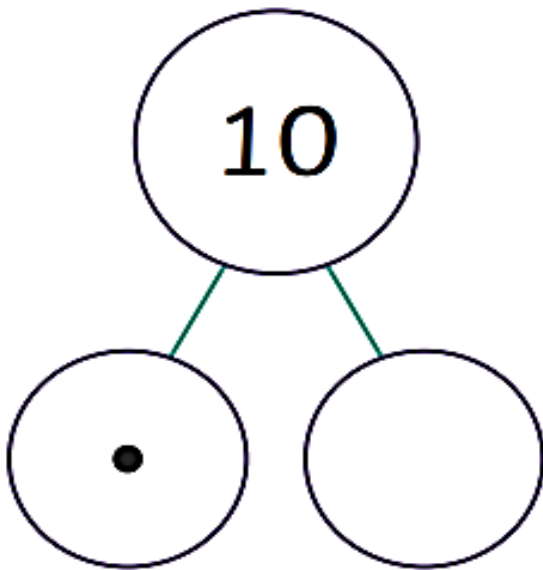
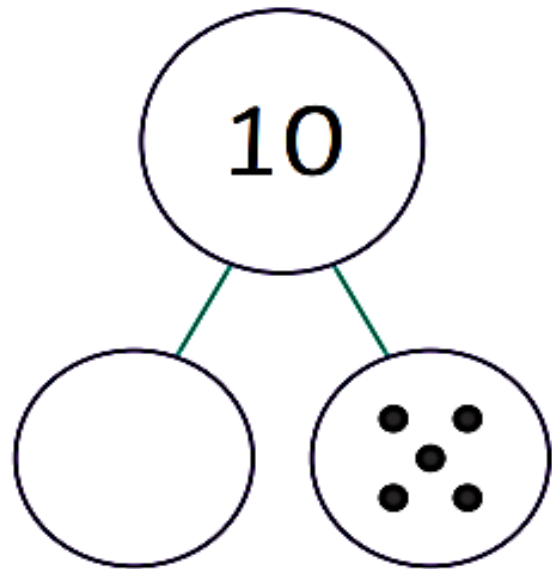
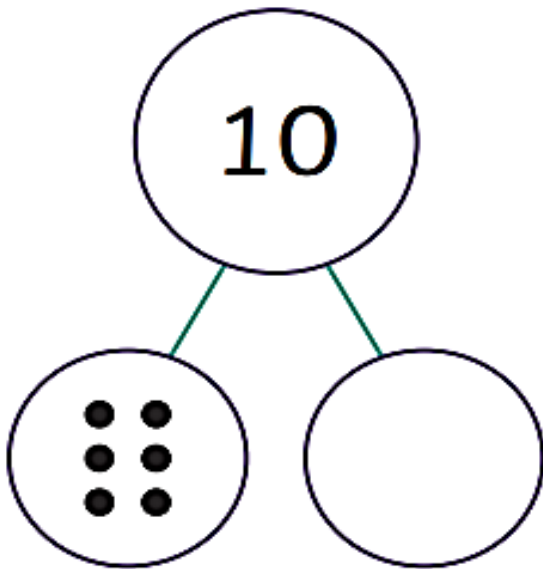


1. Who is the shortest? \_\_\_\_\_
2. Who is the tallest? \_\_\_\_\_
3. Tiger is \_\_\_\_\_ than Mouse.
4. Giraffe is \_\_\_\_\_ than Hippo.
5. Tiger is \_\_\_\_\_ than Giraffe.
6. Hippo is \_\_\_\_\_ than Giraffe.
7. Giraffe is \_\_\_\_\_ than Mouse.
8. Mouse is \_\_\_\_\_ than Tiger.
9. Who is taller than Mouse but shorter than Hippo?  
\_\_\_\_\_
10. Who is shorter than Giraffe and shorter than Tiger?  
\_\_\_\_\_

Question 2

[4]

## Part-Whole Number Bonds of 10



**Question 3**

In each row, write "shortest" under the shortest item and "tallest" under the tallest item.

