

Name: _____

Total: [20]

Class: _____

Question 1

[4]

Seashell Math: Even and Odd Numbers

Even numbers can be paired up.

$3+3$  Odd Even

Odd numbers have 1 number leftover from the pairs.

$8+1$  Odd Even

Is the sum even or odd? Check the correct answer.

$5+3$



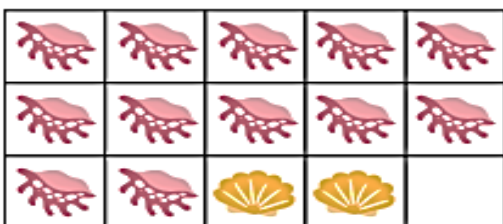
Odd Even

$6+1$




Odd Even

$12+2$



Odd Even

$10+3$



Odd Even

Question 2

[4]

BIRTHDAY 3D SHAPES

Help John find the 3D shapes that match his birthday presents.
Draw a line from each present to the 3D shape that matches.



SPHERE



CYLINDER



CONE










CUBE



Question 3

Count the circles. Write the total. Then, cross out circles according to the equation, and write the difference.


[7]

 $5 - 3 = \underline{2}$	Total: _____
 $7 - 6 = \underline{\quad}$	Total: _____
 $4 - 2 = \underline{\quad}$	Total: _____
 $6 - 1 = \underline{\quad}$	Total: _____
 $9 - 5 = \underline{\quad}$	Total: _____
 $3 - 1 = \underline{\quad}$	Total: _____
 $8 - 5 = \underline{\quad}$	Total: _____

Question 4

Write the names of the 3d shapes

[5]



Sphere

Cone

Cube

Cylinder

Cuboid