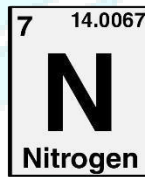

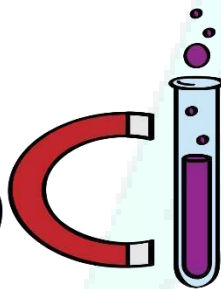
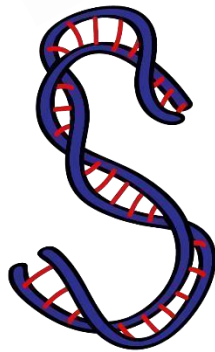


**ASPIRE**  
INTERNATIONAL SCHOOL



Science Department

2023/2024

Year 4

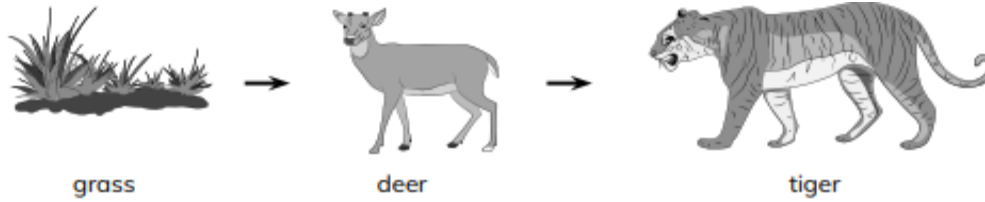
Term 1, Week 10

ASPIRE  
INTERNATIONAL SCHOOL

Name: .....

Class: .....

1. Look at the drawing of a food chain below.



A Why is the grass plant at the start of the food chain?

B How does the grass get its food?

C What do the arrows in the food chain show?

D Describe in your own words the information that the food chain drawing shows.

E In this food chain, will the organisms always be in the same order? Say why or why not.

Bears are omnivores that live in the same forests as tigers.

A What is an omnivore?

B Add a bear to the food chain. Draw the new food chain.



2. Food chains always contain a producer, a predator and prey.

1 What is a producer?

---

---

2 What is the difference between a predator and prey?

---

---

3 Write down the names of the predator and the prey in each of the sentences below.

a A shark eats a turtle.

predator \_\_\_\_\_

prey \_\_\_\_\_

b A fly is caught in a spider's web.

predator \_\_\_\_\_

prey \_\_\_\_\_

ASPIRE  
INTERNATIONAL SCHOOL