

Mid-Term Exam 2023-2024

Subject: Maths	Year: 4	Duration: 80 minutes
-----------------------	----------------	-----------------------------

Name	
Class	

For teacher use only		
Question	Mark	checker
Page 2	/5	
Page3	/7	
Page 4	/8	
page 5	/6	
page 6	/7	
page 7	/3	
page 8	/4	
Total marks	/40	

Instructions:

- 1- Read & answer **all** questions carefully.
- 2- Use a blue or black pen to answer **only**.
- 3- All diagrams should be drawn using a pencil **only**.
- 4- Correction fluid is **not** allowed.

Total number of pages: 8



Aspire International School

1-Here are four numbers.

3003

30003

3000003

30000003

Put a ring around the number thirty thousand and three.

1

2-Write the number 567892 in words

.....

3-Draw a ring around the number which has the digit 5 in the thousands place.

65302

51302

69502

48352

1

4-Match each calculation with its answer

7×1000

70000

7

$700 \div 100$

700

700×100

7000

3

5-

3, 7, 11, 15

a) Write the next two terms

.....

b) Is it a linear sequence or nonlinear? why?

.....

c) What is the term-to-term rule?

.....

d) What is the first term?

.....

4

6-

Tick (✓) the correct box to show if the answers are odd or even.

	Even answer	Odd answer
An even number plus an even number		
An even number plus an odd number		
An odd number plus an odd number		

3

7- Here is a train timetable.

Train timetable				
Starby	08:45	10:15	13:10	14:35
Suntown	09:10	10:40	13:35	15:00
Moonham	10:00	11:30	14:25	15:50
Cloudy Bay	10:35	12:05	15:00	16:25

(a) How long does it take to travel from Starby to Suntown?

..... minutes

(b) Hassan arrives at Moonham station at 15:03

How long does he wait for the train?

..... minutes

c) convert 14:25 into 12-hour format

.....

d) write 2:20 in the morning into 12-hour format

.....

8- Calculate

a)+23 = 45

b) - 34= 45

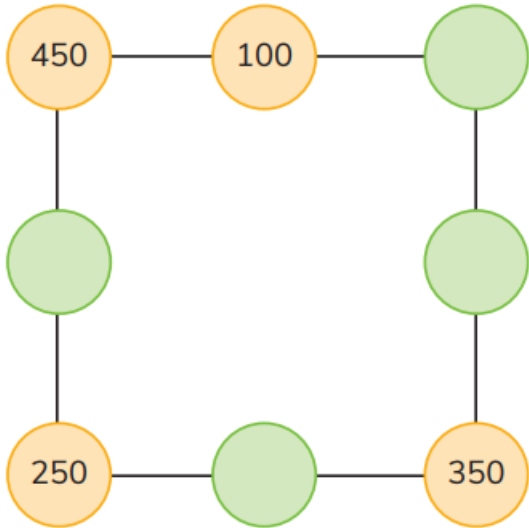
c) 567+456=

d) 805469=.....+5000 ++.....+ 9

4

4

9- In this diagram, the numbers on three circles in a straight line add up to 1000. Complete the diagram



$\frac{\quad}{3}$

10- Copy and complete the number sentence

$$\boxed{5} \boxed{\quad} + \boxed{\quad} \boxed{5} = 100$$

$\frac{\quad}{1}$

11- What is the difference between -2 and 3

.....

$\frac{\quad}{1}$

12- What temperature is 5 ° warmer than -1 °C?

.....

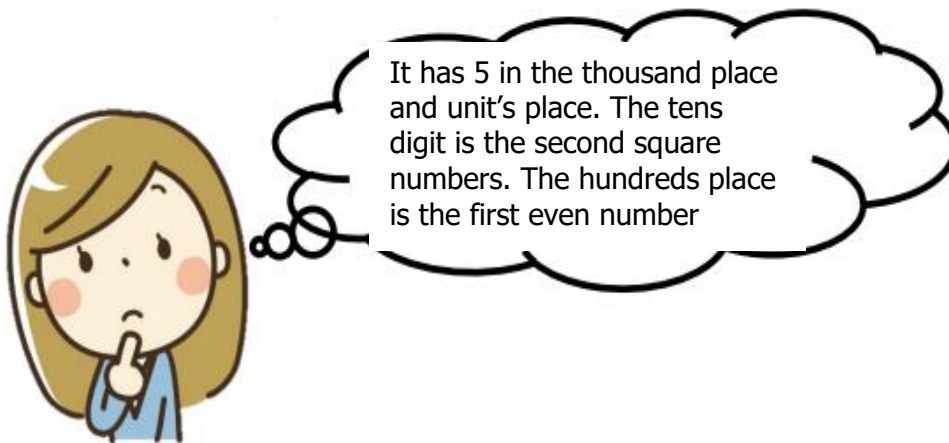
$\frac{\quad}{1}$

13- Which temperature is the coldest?

-6 °C 0 °C 1 °C -2 °C

1

14- Lily thinks of a 4-digit number



.....

1

15-

Choose one of these words or phrases to describe the likelihood that each event happens.

No chance

Poor chance

Even chance

Good chance

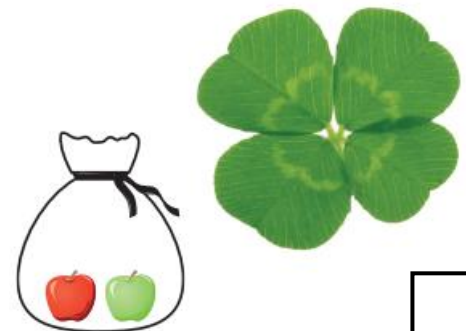
Certain

A) The sun will go down today.

b) I will drop a cake and it will fly upwards.

c) I will find a four-leaf clover.

d) I will be taller in three months.




e) I will pick a red apple from this bag without looking




5

16-

Tally the Vegetables



Count the vegetables and draw tally marks to show the count.

Vegetables	Tally Marks
	
	
	

find the sum of 458 and 238

$$458 = \boxed{400} + \boxed{} + \boxed{}$$

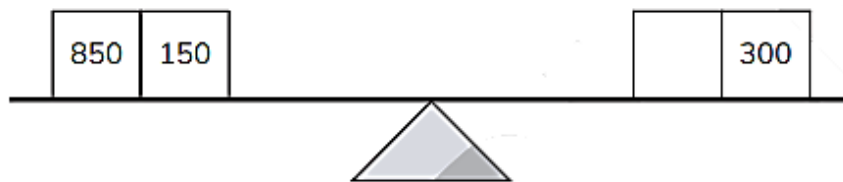
$$238 = \boxed{} + \boxed{} + \boxed{8}$$

$$\boxed{} + \boxed{} + \boxed{} = \boxed{}$$

3

18-

Write the missing number so that the scales balance.



1