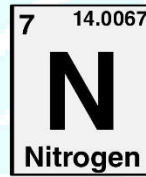
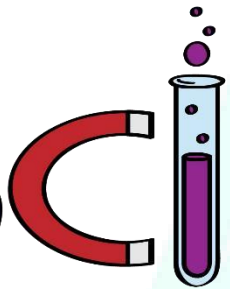
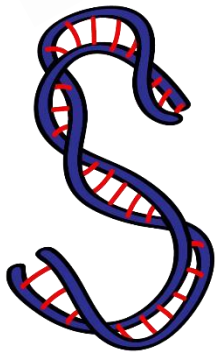


ASPIRE
INTERNATIONAL SCHOOL



Science Department

2023/2024

Year 4

Term 1, Week 5

ASPIRE
INTERNATIONAL SCHOOL

Name:

Class:

1-Look at the label on the bottle of tablets that belong to Mrs Pather.



a What time of day should Mrs Pather take her tablets?

b What is the total number of tablets Mrs Pather must take?

c Should she take her tablets before she eats food? How do you know?


d Write two more instructions for how to take medicine safely.

2-Different ways to take medicines

Nasreen and Fatima asked people in their families about the different ways they take their medicines. Nasreen and Fatima recorded their results in a table.

Way medicine is taken	Number of people		Total number of people
	Nasreen's family	Fatima's family	
Mixture	3	2	
Tablet	5	4	
Injection	1	0	
Inhaler	0	2	
Powder	2	1	

- 1 Fill in the last column of the table.
- 2 Draw a bar graph to show the total number of people who take medicine in each way.



3 Look at your graph. How do most people take their medicine? Suggest a reason for this.

4 Which way do fewest people take their medicine? Suggest a reason for this.

5 Which way do you think most young children take medicine?
Suggest a reason for your answer.

6 Children should not take aspirin. Do some research to find out why this is so.

ASPIRE
INTERNATIONAL SCHOOL