
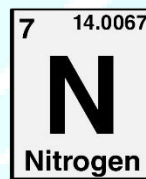
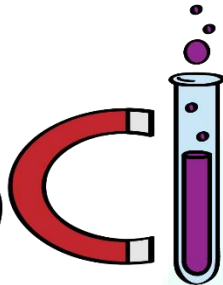
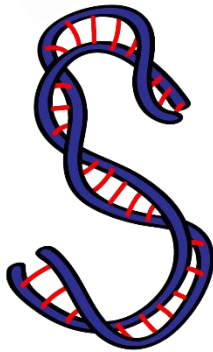




ASPIRE
INTERNATIONAL SCHOOL



Science Department

2023/2024

Year 4

Term 1, Week 1

ASPIRE

INTERNATIONAL SCHOOL

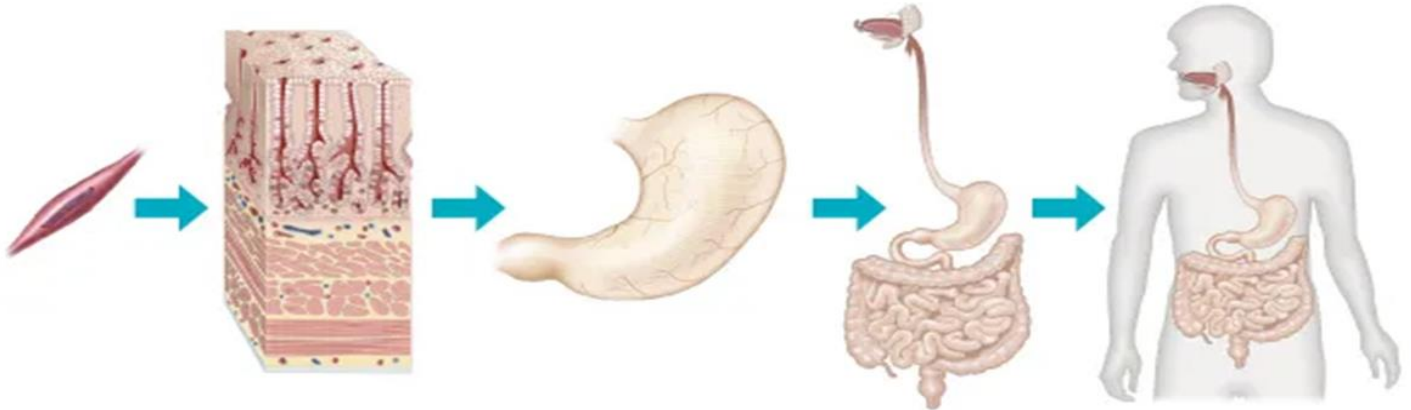
Name:

Class:

1-Try to mention the main function of:

1- skeletal system	<ul style="list-style-type: none"> Breaks down food so that it can be used by the body. <p style="text-align: right;">3</p>
2- muscular system	<p>it is made up from bones</p> <ul style="list-style-type: none"> Protects delicate organs. Supports the body & gives it shape. Helps the body to move. <p style="text-align: right;">1</p>
3- digestive system	<ul style="list-style-type: none"> Removes excess water and minerals from the body <p style="text-align: right;">5</p>
4- nervous system	<p>Works with the bones to help the body to move.</p> <p style="text-align: right;">2</p>
5- Urinary System	<p>Controls all body functions.</p> <p style="text-align: right;">4</p>
6-Circulatory System	<p>Allows exchange of gases in the lung.</p> <p style="text-align: right;">7</p>
7-Respiratory System	<p>Transports blood around the body.</p> <p style="text-align: right;">6</p>

2-Label the following:



3-Complete the following sentences:

- 1- A BODY SYSTEM IS CONSIST OF **Organs**
- 2- A tissue consists of **cells**
- 3- An organ consists of **tissues**

ASPIRE
INTERNATIONAL SCHOOL

4-Label the following diagram using the words below:



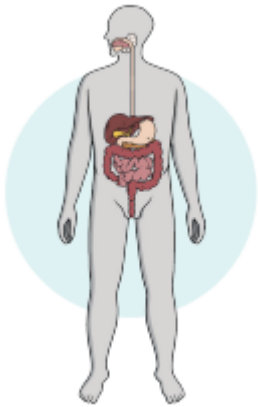
Circulatory system



Muscular system



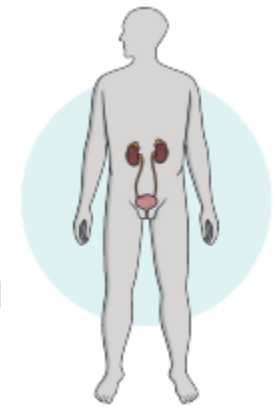
Skeletal system



Digestive system



Nervous system



Urinary system



Respiratory system

- Circulatory system
- Digestive system
- Nervous system
- Urinary system
- Muscular system
- Respiratory system
- Skeletal system