

Science Department

2023/2024

Year 1

Term 1, Week 3

Worksheets 3

Name: .....

Class: .....

## Needs of a Flower

What does a flower need to grow? Fill in the boxes to show the needs of a flower or plant.

You can paste craft items, paste the picture or word cards, draw or write.

### Sun

Sun  
Light  
Warmth



### Water

Water  
Rain



### Nutrients

Soil  
Food



visit [twinkl.com.au](https://www.twinkl.com.au)




sun warmth

light water

rain soil

food



## Parts of a Plant We Eat

Cut out the pictures and words below. Paste them in their correct plant part box.

### Fruit or seeds

Tomato

beans

### Flowers

Broccoli

Cauliflower

### Stem

Spring onion

### Roots

carrot

lettuce

### Leaves





Celery





# Plant Growth Prediction

Look at the condition the seed is planted in. Describe how it will grow.

<b>Growing Conditions</b> How the seed will be planted.	<b>Prediction</b> How the plant will grow.
<p>The seed will be given water and sunlight.</p> 	<p>The seed will grow into a plant.</p>
<p>The seed will be given water and no sunlight.</p> 	<p>The seed will not develop and grow to form a plant.</p>
<p>The seed will be given sunlight and no water.</p> 	<p>The seed will not develop and grow to form a plant as it requires water.</p>
<p>The seed will not be given water and sunlight.</p> 	<p>The seed will not grow as it requires adequate water and sunlight.</p>