
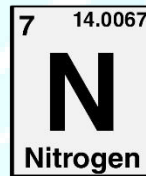

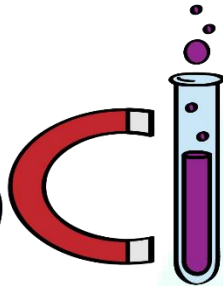
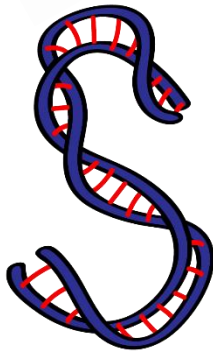




ASPIRE
INTERNATIONAL SCHOOL



Science Department

2023/2024

Year 7

Term 1, Week 4

ASPIRE

INTERNATIONAL SCHOOL

Name:

Class:

Worksheet: 2.2A

Finding mistakes

Some learners have been heating water and recording the temperatures every minute. They used the same volume of water from the same tap on the same day. Here are their results.

Sofia's results	
Time in minutes	Temperature in °C
0	0
1	25
2	32
3	45
4	56
5	63
6	78

Arun's results	
Time in minutes	Temperature
0	25
1	36
2	36
3	48
4	59
5	71
6	82

Marcus's results	
Time in minutes	Temperature in °C
0	25
1	36
2	47
3	52
4	68
5	79
6	89

1 Look carefully at Sofia's results. One of her results does not look quite right. What do you think she has done wrong?

2 Look carefully at Arun's results. He has made two mistakes. What are they?

3 a Look carefully at Marcus's results. One of his results does not fit the pattern. Which is it?

b What should Marcus do about this result?

ASPIRE
INTERNATIONAL SCHOOL