

### Section 1

Double these numbers:

10 →

6 →

8 →

### Section 2

Ben has 15 marbles. He loses 3. How many are left?



### Section 4

Share these apples equally into 2 groups.



How many are in each group?


### Section 6

Share the pencils into groups of 4. How many groups are there?




### Section 3

Colour in the juice to show the jug is  $\frac{3}{4}$  full.



### Section 5

Write the answer to the sum on the calculator:



### Section 7

In 2 years' time, Tom will be 12 years old.



How old is he now?

### Section 8

What time will it be in one hour? Draw the hands on the clock.



### Section 1

Double these numbers:

7 →

9 →

11 →

### Section 2

Ben has 20 marbles. He loses 13. How many are left?



### Section 4

Share these bananas equally into 4 groups.



How many are in each group?

### Section 6

If I share the pencils into groups of 2. How many groups will there be?



### Section 3

A glass of juice is poured out.

$\frac{1}{4}$  of the juice in the jug has gone.

How much is left?



### Section 5

Write the answer to the sum on the calculator:



### Section 7

Two years ago Tom was 11 years old. How old is he today?



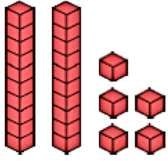
### Section 8

What time will it be in two hours? Draw the hands on the clock.



### Section 1

Write the number in the box.



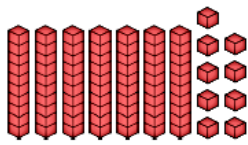
### Section 2

Can I buy the sunglasses?



### Section 1

Write the number in the box.



### Section 2

Can I buy the sunglasses?



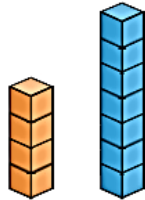
### Section 3

What numbers come next?

10	9	8			
----	---	---	--	--	--

### Section 4

How many cubes taller is the blue tower than the orange tower?



### Section 5

How many fingers are there?




### Section 3

What numbers come next?

84	82	80			
----	----	----	--	--	--

### Section 4

How many cubes taller is the blue tower than the orange tower?



### Section 5

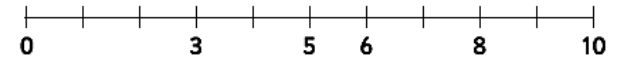


4 lots of 5 fingers =

### Section 6

Put these numbers on the number line.

9 4 2 1 7



### Section 7

9 is 1 more than

6 is 1 more than


### Section 8

Archie has 3 sausages on his plate.

He eats one.

How many are left?

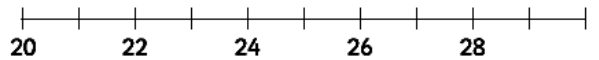
Write a number sentence so show this.



### Section 6

Put these numbers on the number line.

23 30 25 21 27 29



### Section 7

20 is 1 more than

17 is 1 more than

### Section 8

Archie has eaten 2 sausages.

He has 3 left.

How many sausages did he have to start with?

Write a number sentence to show this.

